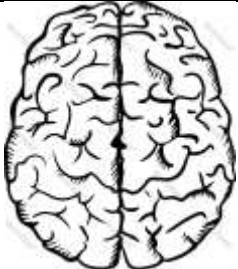


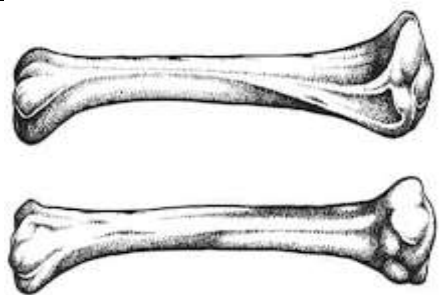


Worksheet-HW Subject: - Environmental Studies (EVS) Class: - II Teacher: - Mrs. Meetu

Name: _____ Class & Sec: _____ Roll No. _____ Date: _____

Holidays Homework Assignment

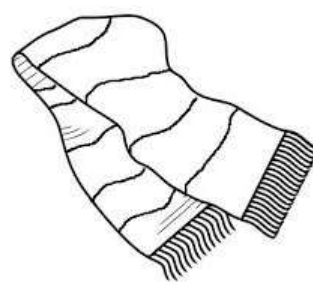
Q1: Name the organ and write its function:

1. 	<hr/> <hr/> <hr/>
2. 	<hr/> <hr/> <hr/>
3. 	<hr/> <hr/> <hr/>
4. 	<hr/> <hr/> <hr/>

Q2: Identify the season from the clothes shown below









Q3: Recognize the professional according to their uniforms:











Q4: Match the following:

1) Body Building Food

Keep us healthy

2) Energy giving food

Help us to grow

3) Protective food

Give us energy